

**Geography**  
**2023 FJCL Regional Forum**

**Choose the BEST answer.**

**Questions 1-5 pertain to ancient cities**

1. Which of these cities was NOT located in ancient Hispania?  
a. Caesaraugusta    b. Valentia    c. Toletum    d. Alexandria
2. Which of these cities was located in modern-day Turkey?  
a. Palmyra    b. Thessalonica    c. Ephesus    d. Serdica
3. The city of Sarmizegetusa Regia is located in modern \_\_\_\_\_.  
a. Moldova    b. Ukraine    c. Bulgaria    d. Romania
4. Where was the ancient city of Corinth located?  
a. Greece    b. Italy    c. Syria    d. Spain
5. Which of these cities was NOT located in ancient Germania?  
a. Colonia Agrippina    b. Byzantium  
c. Augusta Treverorum    d. Mogontiacum

**Questions 6-10 pertain to ancient places and their modern equivalents**

6. Lusitania is modern day \_\_\_\_\_.  
a. Spain    b. France    c. Morocco    d. Portugal
7. The ancient Roman name for the river Rhone in France is  
a. Rhenus    b. Rhodanus    c. Renovius    d. Raeticus
8. The Roman name for the modern-day city of Harran is \_\_\_\_\_.  
a. Colonia Claudia Ara Agrippinensium    b. Colonia Ulpia Traiana  
c. Confluentes    d. Carrhae
9. The city of Zurich was known to the Romans as \_\_\_\_\_.  
a. Turicum    b. Augusta Raurica  
c. Carnuntum    d. Augusta Treverorum
10. Ancient Moesia is located in modern \_\_\_\_\_.  
a. Bulgaria    b. Serbia    c. Romania    d. Hungary

**Questions 11-15 pertain to directional geography**

11. Which of these mountain was farthest north?  
a. Taburnus            b. Grand Atlas            c. Iura            d. Parnassus
12. When Catullus invites Caecilius to leave Comum and come to Verona, in which cardinal direction would Caecilius need to travel?  
a. east            b. west            c. north            d. south
13. To travel by road from Rome to Regium in the toe of southern Italy, what two roads would you take in order?  
a. Via Flaminia and Via Aemilia            b. Via Appia and Via Popilia  
c. Via Aurelia and Via Appia            d. Via Salaria and Via Adriatica
14. Which of the four capitals of Rome during the Tetrarchy is closest to the Black Sea?  
a. Nicomedia            b. Mediolanum            c. Sirmium            d. Augusta Treverorum
15. Order these cities from East to West, listed here alphabetically: Carthago; Colonia Claudia Ara Agrippinensium; Gades; Lugdunum.  
a. Lugdunum, Gades, Carthago, Colonia Claudia Ara Agrippinensium  
b. Gades, Colonia Claudia Ara Agrippinensium, Lugdunum, Carthago  
c. Lugdunum, Gades, Carthago, Colonia Claudia Ara Agrippinensium  
d. Gades, Lugdunum, Colonia Claudia Ara Agrippinensium, Carthago

**Questions 16-20 pertain to provinces of the Roman Empire**

16. In which province was the city of Sirmium (modern Sremska Mitrovika, Serbia) located?  
a. Lusitania            b. Pannonia            c. Syria            d. Mauretania
17. Which of the following was NOT a Roman province located in Africa?  
a. Mauretania            b. Numidia            c. Illyricum            d. Cyrenaica
18. Which of the following was a province of Gallia?  
a. Comata            b. Gallaecia            c. Umbria            d. Cilicia
19. Which province was NOT located in *ancient* Italy?  
a. Venetia            b. Samnium            c. Campania            d. Umbria
20. Which of the following provinces did NOT border the Danube River?  
a. Raetia            b. Moesia            c. Dacia            d. Pontus

**Questions 21-29 refer to the map of the Mediterranean (Map 1)**

21. Which island is labeled 14  
a. Creta                      b. Lesbos                      c. Rhodos                      d. Cyprus
22. Which body of water is labeled 21  
a. Levantine                      b. Propontis                      c. Aegean                      d. Ionian
23. Which River is labeled 3  
a. Hiberus                      b. Matriona                      c. Sequana                      d. Rhenus
24. Which ancient city is labeled 31  
a. Alexandria                      b. Hippo Regius                      c. Leptis Magna                      d. Berenice
25. Balearis Maior is labeled \_\_\_\_\_.  
a. 9                      b. 10                      c. 12                      d. 13
26. Adriaticum is labeled \_\_\_\_\_.  
a. 18                      b. 19                      c. 20                      d. 21
27. Nilus is labeled \_\_\_\_\_.  
a. 5                      b. 6                      c. 7                      d. 8
28. Colonia Iunonia is labeled \_\_\_\_\_.  
a. 24                      b. 25                      c. 26                      d. 27
29. Volubilis is labeled \_\_\_\_\_.  
a. 24                      b. 25                      c. 26                      d. 27

**Questions 30-37 refer to the map of ancient Italy (Map 2)**

30. Lake F is \_\_\_\_\_.  
a. Trasimene                      b. Regillus                      c. Larius                      d. Albanus
31. River E is \_\_\_\_\_.  
a. Po                      b. Tiber                      c. Metaurus                      d. Euphrates
32. Island K is \_\_\_\_\_.  
a. Sicilia                      b. Corsica                      c. Sardinia                      d. Cyprus
33. Mountain O is \_\_\_\_\_.  
a. Aetna                      b. Sila                      c. Parnassus                      d. Alps

34. The mountain(s) labeled L is/are \_\_\_\_\_.  
a. Vesuvius                      b. Colles Albani                      c. Apennines                      d. Ida
35. The lake labeled A is \_\_\_\_\_.  
a. Lacus Lemanus (Geneva)                      b. Lacus Nemoensis (Nemi)  
c. Lacus Larisu (Como)                      d. Lacus Sabatinus (Bracciano)
36. The island labeled N is \_\_\_\_\_.  
a. Corcyra                      b. Sardinia                      c. Elba                      d. Capri
37. The river labeled D is \_\_\_\_\_.  
a. Po                      b. Tiber                      c. Rubicon                      d. Hiberus

**Questions 38-44 refer to the map of Ancient Rome (Map 3)**

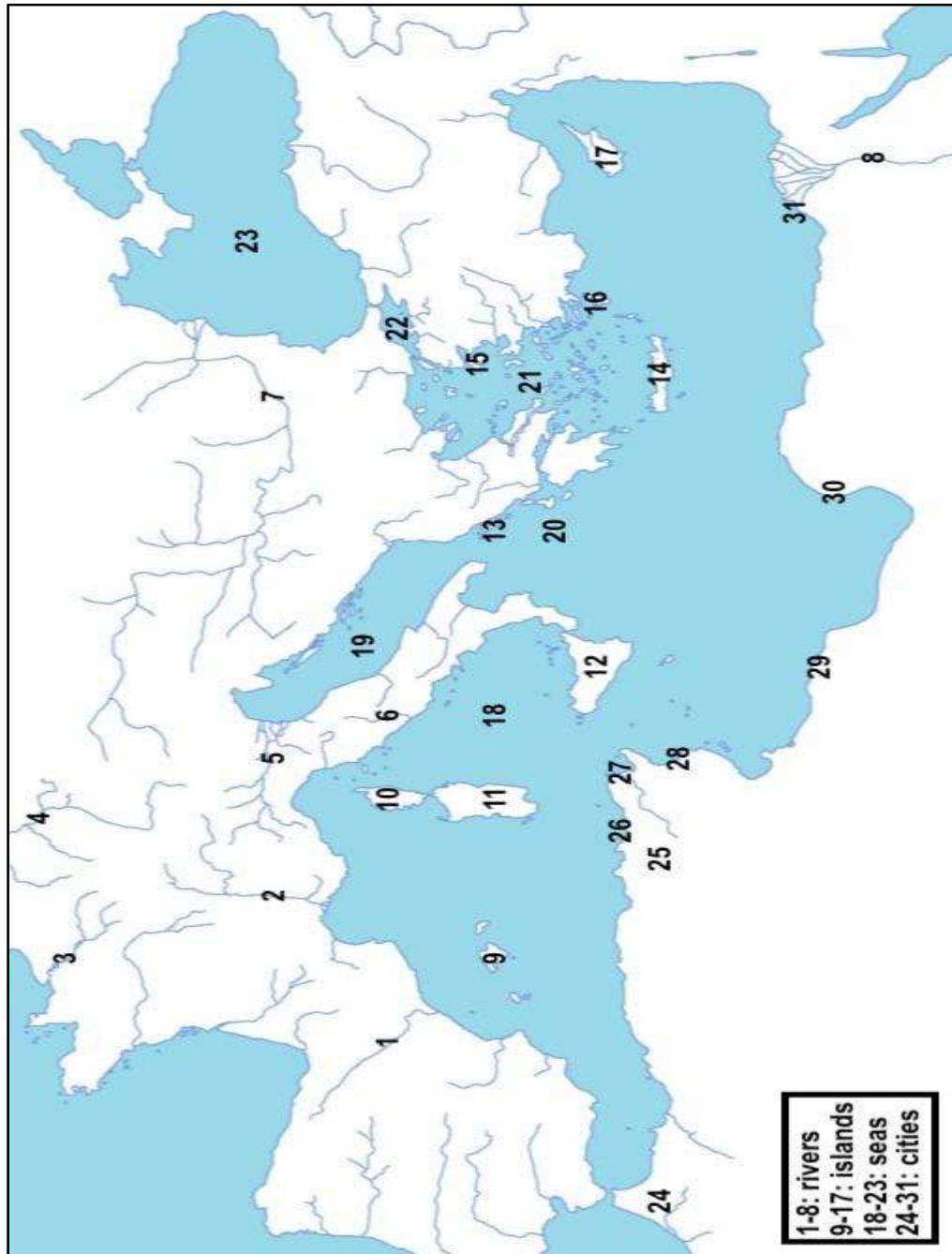
38. B on the map indicates the location of the \_\_\_\_\_.  
a. Forum                      b. Palatine Hill                      c. Capitoline Hill                      d. Ara Pacis
39. J on the map indicates the location of the \_\_\_\_\_.  
a. Campus Martius                      b. Janiculum Hill                      c. Tiber Island                      d. Via Appia
40. 4 on the map indicates the location of the \_\_\_\_\_.  
a. Mausoleum of Hadrian                      b. Circus Maximus  
c. Stadium of Domitian                      d. Mausoleum of Augustus
41. 9 on the map indicates the location of which bath complex?  
a. Baths of Trajan                      b. Baths of Caracalla  
c. Baths of Diocletian                      d. Baths of Titus
42. Viminal Hill is labeled \_\_\_\_\_.  
a. D                      b. M                      c. E                      d. C
43. The Servian Wall is labeled \_\_\_\_\_.  
a. L                      b. M                      c. N                      d. O
44. The Pantheon is labeled \_\_\_\_\_.  
a. 2                      b. 5                      c. 6                      d. 10

**Questions 45-50 refer to the map of Ancient Greece (Map 4)**

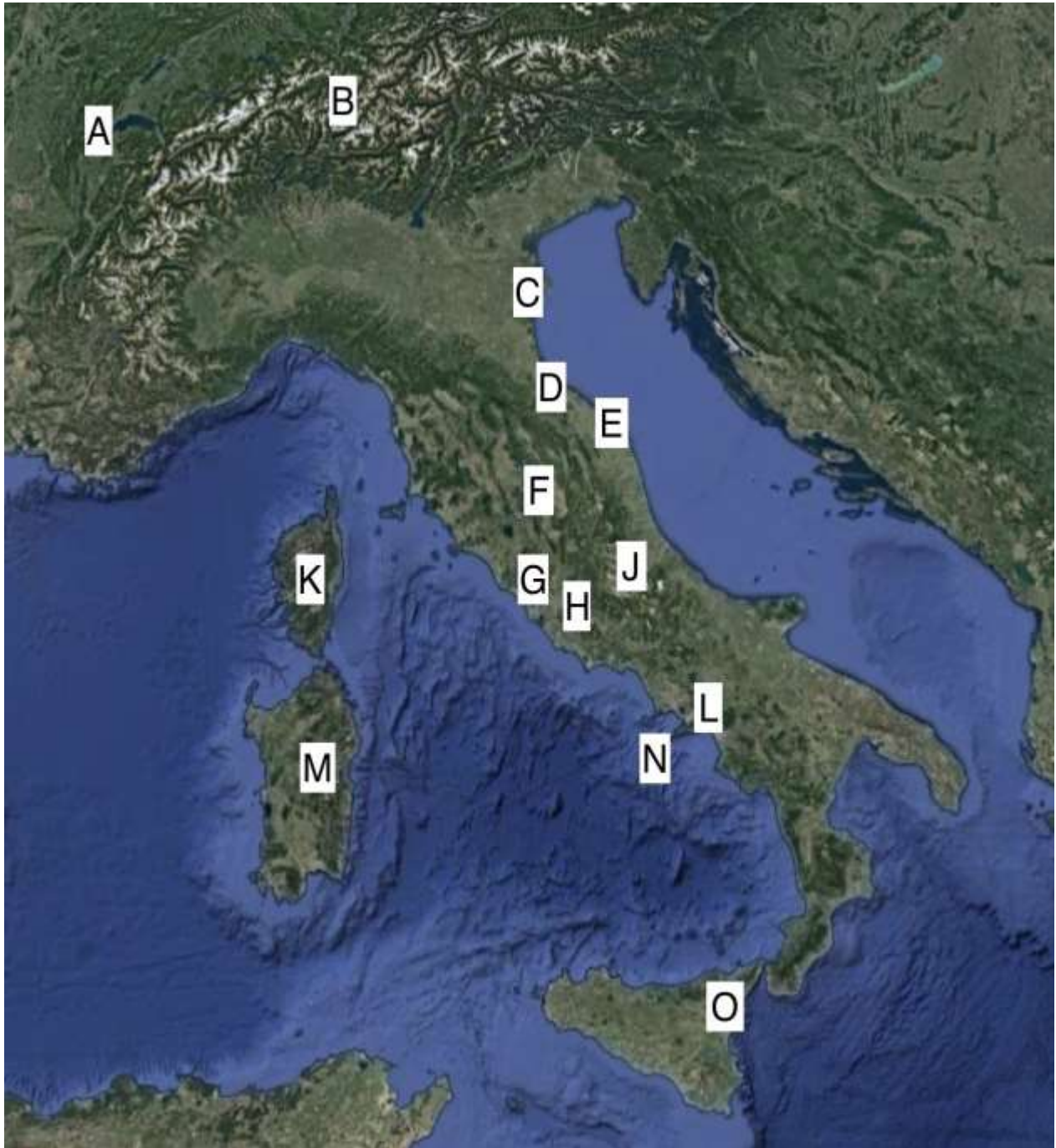
45. F on the map indicates the location of Which mountain?  
a. Parnassus                      b. Helicon                      c. Olympos                      d. Cithaeron

46. 14 on the map indicates the location of \_\_\_\_\_.  
a. Cnossos                      b. Chania                      c. Sparta                      d. Pella
47. M on the map indicates the location of \_\_\_\_\_.  
a. Zakynthos                      b. Ithaca                      c. Corcyra                      d. Salamis
48. Mt. Ida is labeled \_\_\_\_\_.  
a. B                      b. D                      c. G                      d. A
49. The island of Lemnos is labeled \_\_\_\_\_.  
a. R                      b. S                      c. Q                      d. U
50. Athens is labeled \_\_\_\_\_.  
a. 10                      b. 11                      c. 12                      d. 13

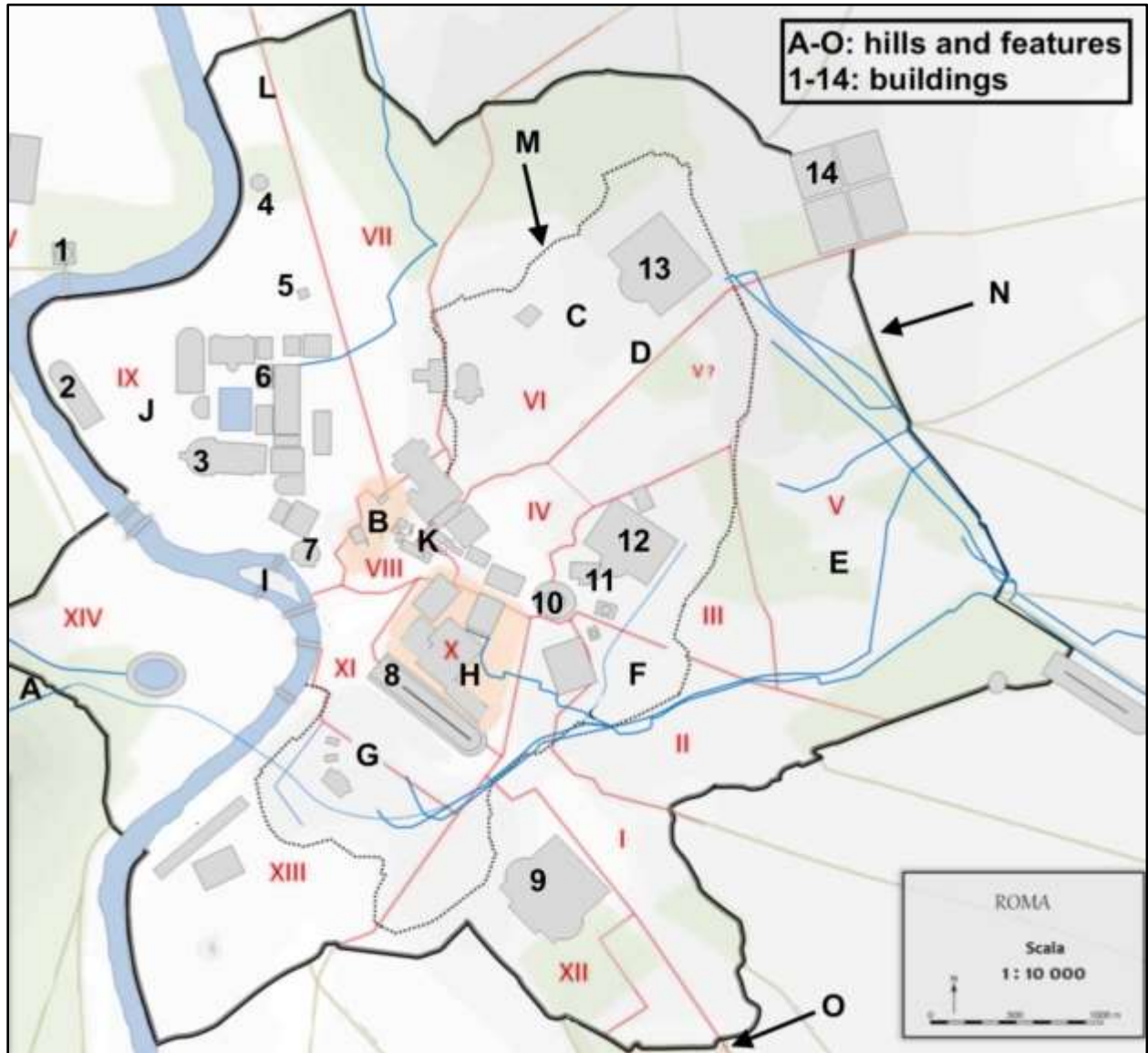
Map 1: The Mediterranean (for questions 21-29)



Map 2: Ancient Italy (for questions 30-37)



Map 3: Ancient Rome (for questions 38-44)





Map 4: Ancient Greece (for questions 45-50)

